

Solutions to JEE(Main)-2019

Test Date: 10th April 2019 (Second Shift)

PHYSICS, CHEMISTRY & MATHEMATICS

Paper - 1

Time Allotted: 3 Hours

Maximum Marks: 360

- Please read the instructions carefully. You are allotted 5 minutes specifically for this purpose.

Important Instructions:

1. The test is of **3 hours** duration.
2. This **Test Paper** consists of **90** questions. The maximum marks are **360**.
3. There are **three** parts in the question paper A, B, C consisting of **Physics, Chemistry** and **Mathematics** having 30 questions in each part of equal weightage. Each question is allotted **4 (four)** marks for correct response.
4. Out of the four options given for each question, only one option is the correct answer.
5. For each incorrect response 1 mark i.e. $\frac{1}{4}$ (**one-fourth**) marks of the total marks allotted to the question will be deducted from the total score. No deduction from the total score, however, will be made if no response is indicated for an item in the Answer Box.
6. *Candidates will be awarded marks as stated above in **instruction No.3** for correct response of each question. One mark will be deducted for indicating incorrect response of each question. No deduction from the total score will be made if no response is indicated for an item in the answer box.*
7. There is only one correct response for each question. Marked up more than one response in any question will be treated as wrong response and marked up for wrong response will be deducted accordingly as per **instruction 6** above.

PART –A (PHYSICS)

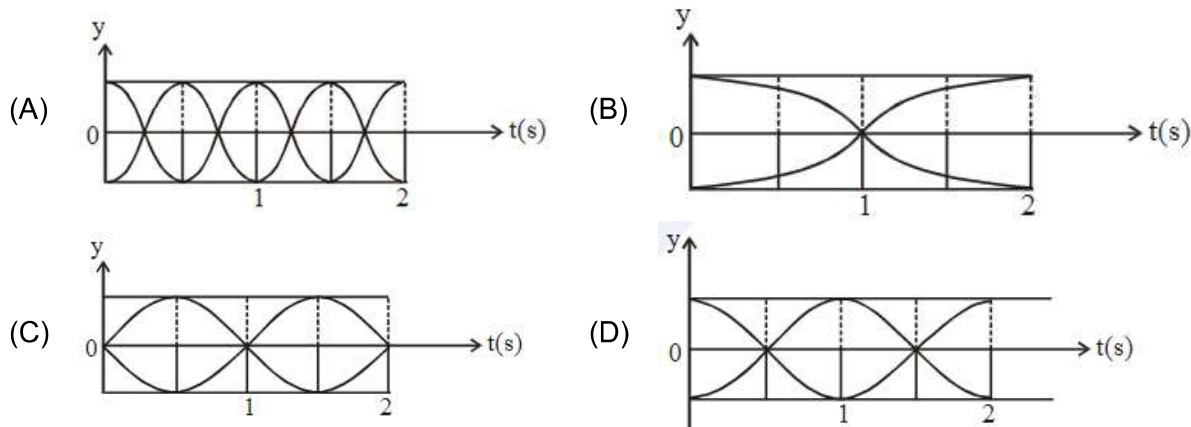
1. One mole of an ideal gas passes through a process where pressure and volume obey the relation $P = P_0 \left[1 - \frac{1}{2} \left(\frac{V_0}{V} \right)^2 \right]$. Here P_0 and V_0 are constants. Calculate the change in the temperature of the gas if its volume change from V_0 to $2V_0$.

(A) $\frac{1 P_0 V_0}{4 R}$ (B) $\frac{1 P_0 V_0}{2 R}$
 (C) $\frac{5 P_0 V_0}{4 R}$ (D) $\frac{3 P_0 V_0}{4 R}$

2. A solid sphere of mass M and radius R is divided into two unequal parts. The first part has a mass of $\frac{7M}{8}$ and is converted into a uniform disc of radius $2R$. The second part is converted into a uniform solid sphere. Let I_1 be the moment of inertia of the disc about its axis and I_2 be the moment of inertia of the new sphere about its axis. The ratio of I_1/I_2 is given by:

(A) 285 (B) 185
 (C) 65 (D) 140

3. The correct figure that shows, schematically, the wave pattern produced by superposition of two waves of frequencies 9 Hz and 11 Hz,

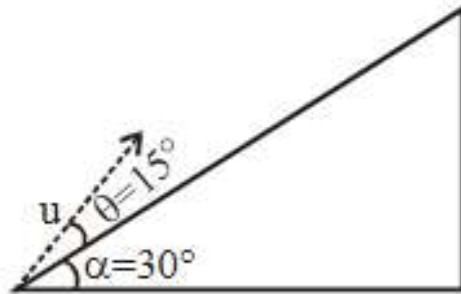


4. In an experiment, brass and steel wires of length 1 m each with areas of cross section 1 mm^2 are used. The wires are connected in series and one end of the combined wire is connected to a rigid support and other end is subjected to elongation. The stress requires to produced a new elongation of 0.2 mm is

[Given, the Young's Modulus for steel and brass are respectively $120 \times 10^9 \text{ N/m}^2$ and $60 \times 10^9 \text{ N/m}^2$]

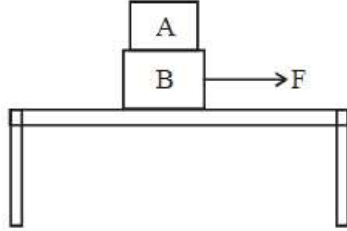
(A) $1.8 \times 10^6 \text{ N/m}^2$ (B) $0.2 \times 10^6 \text{ N/m}^2$
 (C) $1.2 \times 10^6 \text{ N/m}^2$ (D) $4.0 \times 10^6 \text{ N/m}^2$

5. When heat Q is supplied to a diatomic gas of rigid molecules at constant volume its temperature increases by ΔT . The heat required to produce the same change in temperature, at constant pressure is
- (A) $\frac{3}{2}Q$ (B) $\frac{5}{3}Q$
 (C) $\frac{7}{5}Q$ (D) $\frac{2}{3}Q$
6. A bullet of mass 20 g has an initial speed of 1 ms^{-1} just before it starts penetrating a mud wall of thickness 20 cm. If the wall offers a mean resistance of $2.5 \times 10^{-2} \text{ N}$, the speed of the bullet after emerging from the other side of the wall is close to
- (A) 0.7 ms^{-1} (B) 0.3 ms^{-1}
 (C) 0.1 ms^{-1} (D) 0.4 ms^{-1}
7. The elastic limit of brass is 379 MPa. What should be the minimum diameter of a brass rod if it is to support a 400 N load without exceeding its elastic limit?
- (A) 1.00 mm (B) 1.16 mm
 (C) 0.90 mm (D) 1.36 mm
8. A plane is inclined at an angle $\alpha = 30^\circ$ with respect to the horizontal. A particle is projected with a speed $u = 2 \text{ ms}^{-1}$, from the base of the plane, making an angle $\theta = 15^\circ$ with respect to the plane as shown in the figure. The distance from the base at which the particle hits the plane is close to
 (Take $g = 10 \text{ ms}^{-2}$)

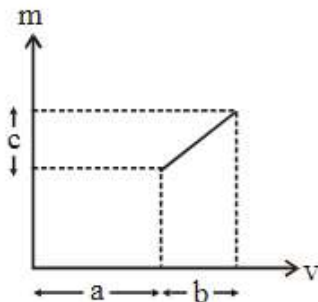


- (A) 18 cm (B) 14 cm
 (C) 26 cm (D) 20 cm
9. The magnitude of the magnetic field at the centre of an equilateral triangular loop of side 1 m which is carrying a current of 10 A is: [Take $\mu_0 = 4\pi \times 10^{-7} \text{ NA}^{-2}$]
- (A) $9\mu\text{T}$ (B) $1\mu\text{T}$
 (C) $3\mu\text{T}$ (D) $18\mu\text{T}$
10. Two radioactive substances A and B have decay constants 5λ and λ respectively. At $t = 0$, a sample has the same number of the two nuclei. The time taken for the ratio of the number of nuclei to become $\left(\frac{1}{e}\right)^2$ will be
- (A) $1/\lambda$ (B) $1/4\lambda$
 (C) $2/\lambda$ (D) $1/2\lambda$

11. Two blocks A and B of masses $m_A = 1 \text{ kg}$ and $m_B = 3 \text{ kg}$ are kept on the table as shown in figure. The coefficient of friction between A and B is 0.2 and between B and the surface of the table is also 0.2. The maximum force F that can be applied on B horizontal, so that the block A does not slide over the block B is:
[Take $g = 10 \text{ m/s}^2$]

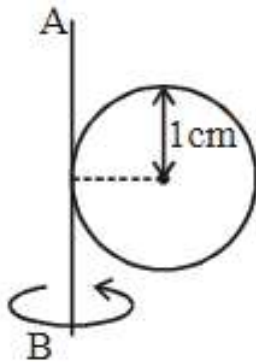


- (A) 8 N
(B) 16 N
(C) 12 N
(D) 40 N
12. The formula $X = 5YZ^2$ and Z have dimensions of capacitance and magnetic field respectively. What are the dimensions of Y in SI units?
(A) $[M^{-2} L^0 T^{-4} A^{-2}]$
(B) $[M^{-3} L^{-2} T^8 A^{-1}]$
(C) $[M^{-2} L^{-2} T^6 A^3]$
(D) $[M^{-1} L^{-2} T^4 A^2]$
13. In Li^{++} , electron in first Bohr orbit is excited to a level by a radiation of wavelength λ . When the ion gets deexcited to the ground state in all possible ways (including intermediate emission) a total of six spectral lines are observed. What is the value of λ ?
(Given: $h = 6.63 \times 10^{34} \text{ js}$; $e = 3 \times 10^8 \text{ ms}^{-1}$)
(A) 10.8 nm
(B) 11.4 nm
(C) 9.4 nm
(D) 12.3 nm
14. The graph shows how the magnification m produced by a thin lens varies with image distance v . What is the focal length of the lens used?



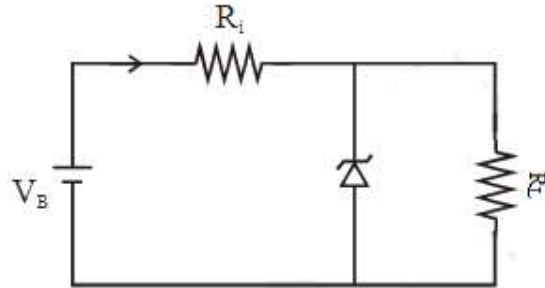
- (A) $\frac{b^2}{ac}$
(B) $\frac{a}{c}$
(C) $\frac{b^2c}{a}$
(D) $\frac{b}{c}$
15. A spaceship orbits around a planet at a height of 20 km from its surface. Assuming that only gravitational field of the planet acts on the spaceship. What will be the number of complete revolutions made by the spaceship in 24 hours around the planet?
[Given: Mass of planet = $8 \times 10^{22} \text{ kg}$, Radius of planet = $2 \times 10^6 \text{ m}$, Gravitational constant $G = 6.67 \times 10^{-11} \text{ Mn}^2/\text{kg}^2$]
(A) 9
(B) 11
(C) 13
(D) 17

16. Light is incident normally on a completely absorbing surface with an energy flux of 25 W cm^{-2} . If the surface has an area of 25 cm^2 , the maximum transferred to the surface in 40 min time duration will be
 (A) $6.3 \times 10^{-4} \text{ Ns}$ (B) $3.5 \times 10^{-6} \text{ Ns}$
 (C) $5.0 \times 10^{-3} \text{ Ns}$ (D) $1.4 \times 10^{-6} \text{ Ns}$
17. The time dependence of the position of a particle of mass $m = 2$ is given by $\vec{r}(t) = 2t\hat{i} - 3t^2\hat{j}$. Its angular momentum with respect to the origin at time $t = 2$ is .
 (A) $-48\hat{k}$ (B) $48(\hat{i} + \hat{j})$
 (C) $36\hat{k}$ (D) $-34(\hat{k} - \hat{i})$
18. Water from a tap emerges vertically downwards with an initial speed of 1.0 ms^{-1} . The cross-sectional area of the tap is 10^{-4} m^2 . Assume that the pressure is constant throughout the stream of water and that flow is streamlined. The cross-sectional area of the stream, 0.15 m below the tap would be:
 (take $g = 10 \text{ ms}^{-2}$)
 (A) $5 \times 10^{-4} \text{ m}^2$ (B) $5 \times 10^{-5} \text{ m}^2$
 (C) $1 \times 10^{-5} \text{ m}^2$ (D) $2 \times 10^{-5} \text{ m}^2$
19. Space between two concentric conducting spheres of radii a and b ($b > a$) is filled with a medium of resistivity ρ . The resistance between the two spheres will be
 (A) $\frac{\rho}{2\pi} \left(\frac{1}{a} + \frac{1}{b} \right)$ (B) $\frac{\rho}{2\pi} \left(\frac{1}{a} - \frac{1}{b} \right)$
 (C) $\frac{\rho}{4\pi} \left(\frac{1}{a} + \frac{1}{b} \right)$ (D) $\frac{\rho}{4\pi} \left(\frac{1}{a} - \frac{1}{b} \right)$
20. A metal coin of mass 5 g and radius 1 cm is fixed to a thin stick AB of negligible mass as shown in the figure. The system is initially at rest. The constant torque, that will make the system rotate about AB at 25 rotations per second in 5 s is close to



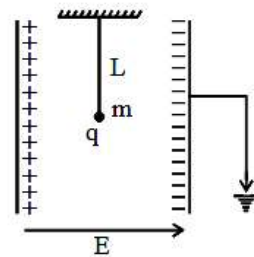
- (A) $2.0 \times 10^{-5} \text{ Nm}$ (B) $4.0 \times 10^{-6} \text{ Nm}$
 (C) $1.6 \times 10^{-5} \text{ Nm}$ (D) $7.9 \times 10^{-6} \text{ Nm}$

21. The figure represents a voltage regulator circuit using a Zener diode. The breakdown voltage of the Zener diode is 6 V and the load resistance is $R_L = 4\text{ k}\Omega$. The series resistance of the circuit is $R_i = 1\text{ k}\Omega$. If the battery voltage V_B varies from 8 V to 16 V, what are the minimum and maximum values of the current through Zener diode?



- (A) 0.5 mA; 0.6 mA
 (B) 1 mA; 8.5 mA
 (C) 1.5 mA; 8.5 mA
 (D) 0.5 mA; 8.5 mA

22. A simple pendulum of length L is placed between the plates of a parallel plate capacitor having electric field E , as shown in figure. Its bob has mass m and charge q . the time period of the pendulum is given by



- (A) $2\pi \sqrt{\frac{L}{\sqrt{g^2 + \left(\frac{qE}{m}\right)^2}}}$
 (B) $2\pi \sqrt{\frac{L}{\left(g + \frac{qE}{m}\right)}}$
 (C) $2\pi \sqrt{\frac{L}{\left(g - \frac{qE}{m}\right)}}$
 (D) $2\pi \sqrt{\frac{L}{\sqrt{g^2 - \frac{q^2 E^2}{m^2}}}}$

23. In free space, a particle A of charge $1\ \mu\text{C}$ is held fixed at a point P. Another particle B of the same charge and mass $4\ \mu\text{g}$ is kept at a distance of 1 mm from P. If B is released, then its velocity at a distance of 9 mm from P is

$$\left[\text{Take } \frac{1}{4\pi\epsilon_0} = 9 \times 10^9 \text{ Nm}^2\text{C}^{-2} \right]$$

- (A) $1.5 \times 10^2 \text{ m/s}$
 (B) $2.0 \times 10^3 \text{ m/s}$
 (C) 1.0 m/s
 (D) $3.0 \times 10^4 \text{ m/s}$

24. A 2 mW laser operates at a wavelength of 500 nm. The number of photons that will be emitted per second is

[Given Planck's constant $h = 6.6 \times 10^{-34} \text{ Js}$, speed of light $c = 3.0 \times 10^8 \text{ m/s}$]

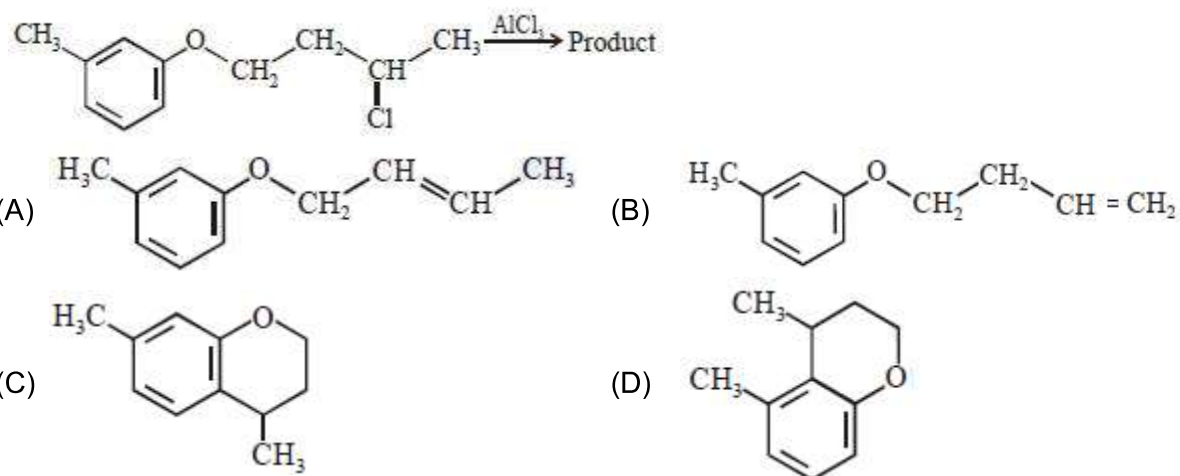
- (A) 1×10^{16}
 (B) 1.5×10^{16}
 (C) 2×10^{16}
 (D) 5×10^{15}

25. A coil of self inductance 10 mH and resistance 0.1Ω is connected through a switch to a battery of internal resistance 0.9Ω . After the switch is closed the time taken for the current to attain 80% of the saturation values is: [take $\ln 5 = 1.6$]
 (A) 0.016 s (B) 0.324 s
 (C) 0.002 s (D) 0.103 s
26. A submarine experiences a pressure of 5.05×10^6 Pa at a depth of d_1 in a sea. When it goes further to a depth of d_2 , it experiences a pressure of 8.08×10^6 Pa. Then $d_2 - d_1$ is approximately (density of water = 10^3 kg/m³ and acceleration due to gravity = 10 ms⁻²)
 (A) 400 m (B) 500 m
 (C) 600 m (D) 300 m
27. A cubical block of side 0.5 m floats on water with 30% of its volume under water. What is the maximum weight that can be put on the block without fully submerging it under water?
 [Take density of water = 10^3 kg/m³]
 (A) 46.3 kg (B) 65.4 kg
 (C) 30.1 kg (D) 87.5 kg
28. In a Young's double slit experiment the ratio of the slit's width is 4 : 1. The ratio of the intensity of maxima to minima, close to central fringe on the screen will be
 (A) $(\sqrt{3} + 1)^4 : 16$ (B) 25 : 9
 (C) 9 : 1 (D) 4:1
29. A source of sound S is moving with the velocity of 50 m/s towards a stationary observer. The observer measures the frequency of the sound as 1000 Hz. What will be the apparent frequency of the source when it is moving away from the observer after crossing him?
 (Take velocity of sound in air is 350 m/s)
 (A) 1143 Hz (B) 857 Hz
 (C) 750 Hz (D) 807 Hz
30. A square loop is carrying a steady current I and the magnitude of its magnetic dipole moment is m . If this square loop is changed to a circular loop and it carries the same current, the magnitude of the magnetic dipole moment of circular loop will be
 (A) $\frac{m}{\pi}$ (B) $\frac{3m}{\pi}$
 (C) $\frac{4m}{\pi}$ (D) $\frac{2m}{\pi}$

PART –B (CHEMISTRY)

31. The difference between ΔH and ΔU ($\Delta H - \Delta U$), when the combustion of one mole of heptane(l) is carried out a temperature T is equal to
 (A) -4 RT (B) -3 RT
 (C) 3 RT (D) 4 RT

32. The major product obtained in the given reaction is



33. The ratio of the shortest wavelength of two spectral series of hydrogen spectrum is found to be about 9. The spectral series are:
 (A) Lyman and Paschen (B) Brackett and Pfund
 (C) Paschen and Pfund (D) Balmer and Brackett

34. The correct order of the first ionization enthalpies is
 (A) Mn < Ti < Zn < Ni (B) Zn < Ni < Mn < Ti
 (C) Ti < Mn < Zn < Ni (D) Ti < Mn < Ni < Zn

35. The correct statements among (a) to (b) are:
 (a) saline hydrides produce H_2 gas when reacted with H_2O .
 (b) reaction of $LiAlH_4$ with BF_3 leads to B_2H_6 .
 (c) PH_3 and CH_4 are electron - rich and electron-precise hydrides, respectively.
 (d) HF and CH_4 are called as molecular hydrides.
 (A) (c) and (d) only (B) (a), (b) and (c) only
 (C) (a), (b), (c) and (d) (D) (a), (c) and (d) only

36. Air pollution that occurs in sunlight is:
 (A) oxidising smog (B) acid rain
 (C) reducing smog (D) fog

37. For the re action of H_2 w i t h I_2 , the rate constant is $2.5 \times 10^{-4} \text{ dm}^3 \text{ mol}^{-1} \text{ s}^{-1}$ at 327°C and $1.0 \text{ dm}^3 \text{ mol}^{-1} \text{ s}^{-1}$ at 527°C . The activation energy for the reaction, in kJ mol^{-1} is:
 ($R = 8.314 \text{ J K}^{-1} \text{ mol}^{-1}$)
 (A) 72 (B) 166
 (C) 150 (D) 59

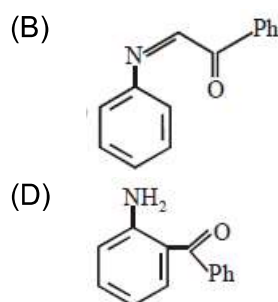
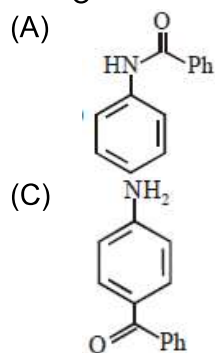
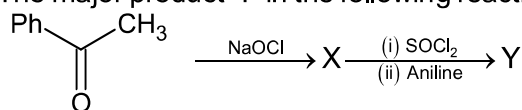
38. In chromatography, which of the following statements is INCORRECT for R_f ?
- (A) R_f value depends on the type of chromatography.
 (B) The value of R_f can not be more than one.
 (C) Higher R_f value means higher adsorption.
 (D) R_f value is dependent on the mobile phase.
39. A hydrated solid X on heating initially gives a monohydrated compound Y. Y upon heating above 373K leads to an anhydrous white powder Z. X and Z, respectively, are:
- (A) Washing soda and soda ash. (B) Washing soda and dead burnt plaster.
 (C) Baking soda and dead burnt plaster. (D) Baking soda and soda ash.
40. The INCORRECT statement is:
- (A) the spin-only magnetic moments of $[\text{Fe}(\text{H}_2\text{O})_6]^{2+}$ and $[\text{Cr}(\text{H}_2\text{O})_6]^{2+}$ are nearly similar.
 (B) the spin-only magnetic moment of $[\text{Ni}(\text{NH}_3)_4(\text{H}_2\text{O})_2]^{2+}$ is 2.83 BM.
 (C) the gemstone, ruby, has Cr^{3+} ions occupying the octahedral sites of beryl.
 (D) the color of $[\text{CoCl}(\text{NH}_3)_5]^{2+}$ is violet as it absorbs the yellow light.
41. Which of these factors does not govern the stability of a conformation in acyclic compounds?
- (A) Torsional strain (B) Angle strain
 (C) Steric interactions (D) Electrostatic forces of interaction
42. The correct statement is:
- (A) zincite is a carbonate ore
 (B) aniline is a froth stabilizer
 (C) zone refining process is used for the refining of titanium
 (D) sodium cyanide cannot be used in the metallurgy of silver
43. For the reaction,
- $$2\text{SO}_2(\text{g}) + \text{O}_2(\text{g}) \longrightarrow 2\text{SO}_3(\text{g})$$
- $\Delta_H = -57.2 \text{ kJ mol}^{-1}$ and
 $K_C = 1.7 \times 10^{16}$
- Which of the following statement is INCORRECT?
- (A) The equilibrium constant is large suggestive of reaction going to completion and so no catalyst is required.
 (B) The equilibrium will shift in forward direction as the pressure increase.
 (C) The equilibrium constant decreases as the temperature increases.
 (D) The addition of inert gas at constant volume will not affect the equilibrium constant.
44. The increasing order of nucleophilicity of the following nucleophiles is :
- (a) CH_3CO_2^- (b) H_2O
 (c) CH_3SO_3^- (d) $\bar{\text{O}}\text{H}$
- (A) (b) < (c) < (a) < (d) (B) (a) < (d) < (c) < (b)
 (C) (d) < (a) < (c) < (b) (D) (b) < (c) < (d) < (a)

45. The correct match between Item-I and Item-II is:

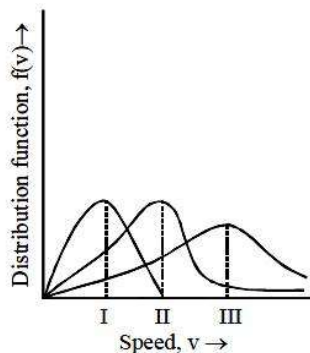
	Item-I		Item-II
(a)	High density polythene	(I)	Peroxide catalyst
(b)	Polyacrylonitrile	(II)	Condensation at high temperature & pressure
(c)	Novolac	(III)	Ziegler-Natta Catalyst
(d)	Nylon 6	(IV)	Acid or base catalyst

- (A) (a) → (III), (b)→(I), (c)→(II), (d)→(IV)
 (B) (a)→(IV), (b)→(II), (c)→(I), (d)→(III)
 (C) (a)→(II), (b)→(IV), (c)→(I), (d)→(III)
 (D) (a)→(III), (b)→(I), (c)→(IV), (d)→(II)

46. The major product 'Y' in the following reaction is:-

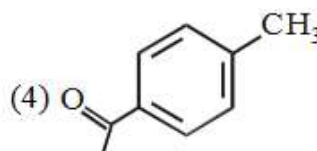
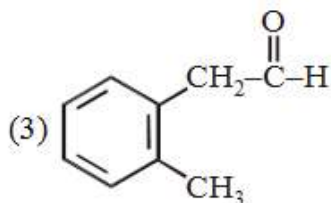
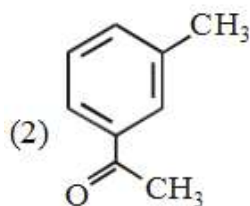
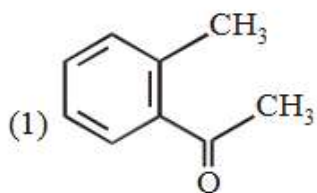


47. Points I, II and III in the following plot respectively correspond to (V_{mp} : most probable velocity)



- (A) V_{mp} of N_2 (300K); V_{mp} of H_2 (300K); V_{mp} of O_2 (400K)
 (B) V_{mp} of H_2 (300K); V_{mp} of N_2 (300K); V_{mp} of O_2 (400K)
 (C) V_{mp} of O_2 (400K); V_{mp} of N_2 (300K); V_{mp} of H_2 (300K)
 (D) V_{mp} of N_2 (300K); V_{mp} of O_2 (400K); V_{mp} of H_2 (300K)

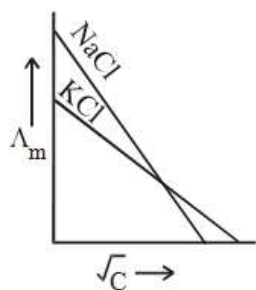
48. The highest possible oxidation states of uranium and plutonium, respectively, are
 (A) 6 and 4 (B) 7 and 6
 (C) 4 and 6 (D) 6 and 7
49. Compound A ($C_9H_{10}O$) shows positive iodoform test. Oxidation of A with $KMnO_4/KOH$ gives acid B ($C_8H_6O_4$). Anhydride of B is used for the preparation of phenolphthalein. Compound A is:-



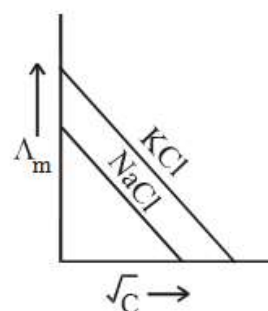
50. The noble gas that does NOT occur in the atmosphere is:
 (A) He (B) Ra
 (C) Ne (D) Kr
51. The pH of a 0.02 M NH_4Cl solution will be
 [given $K_b(NH_4OH) = 10^{-5}$ and $\log 2 = 0.301$]
 (A) 2.65 (B) 5.35
 (C) 4.35 (D) 4.65
52. The crystal field stabilization energy (CFSE) of $[Fe(H_2O)_6]Cl_2$ and $K_2[NiCl_4]$, respectively, are :-
 (A) $-0.4\Delta_o$ and $-0.8\Delta_t$ (B) $-0.4\Delta_o$ and $-1.2\Delta_t$
 (C) $-2.4\Delta_o$ and $-1.2\Delta_t$ (D) $-0.6\Delta_o$ and $-0.8\Delta_t$
53. The correct option among the following is:
 (A) Colloidal particles in lyophobic sols can be precipitated by electrophoresis.
 (B) Brownian motion in colloidal solution is faster the viscosity of the solution is very high.
 (C) Colloidal medicines are more effective because they have small surface area.
 (D) Addition of alum to water makes it unfit for drinking.

54. Which one of the following graphs between molar conductivity (Λ_m) versus \sqrt{C} is correct?

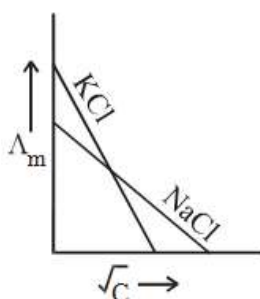
(A)



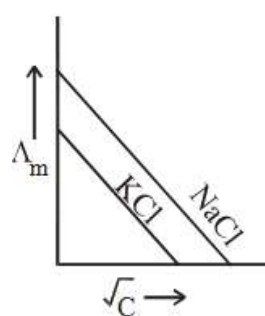
(B)



(C)



(D)



55. 1 g of non-volatile non-electrolyte solute is dissolved in 100g of two different solvents A and B whose ebullioscopic constants are in the ratio of 1 : 5. The ratio of the elevation in their boiling points, $\frac{\Delta T_b(A)}{\Delta T_b(B)}$ is :

(A) 5 : 1

(B) 10 : 1

(C) 1 : 5

(D) 1 : 0.2

56. Which of the following is NOT a correct method of the preparation of benzylamine from cyanobenzene?

(A) (i) HCl/H₂O (ii) NaBH₄

(B) (i) LiAlH₄ (ii) H₃O⁺

(C) (i) SnCl₂ + HCl(gas) (ii) NaBH₄

(D) H₂/Ni

57. The number of pentagons in C₆₀ and trigons (triangles) in white phosphorus, respectively, are:

(A) 12 and 3

(B) 20 and 4

(C) 12 and 4

(D) 20 and 3

58. The minimum amount of O₂(g) consumed per gram of reactant is for the reaction :
(Given atomic mass : Fe = 56, O = 16, Mg = 24, P = 31, C = 12, H = 1)

(A) C₃H₈(g) + 5O₂(g) → 3 CO₂(g) + 4 H₂O(l)

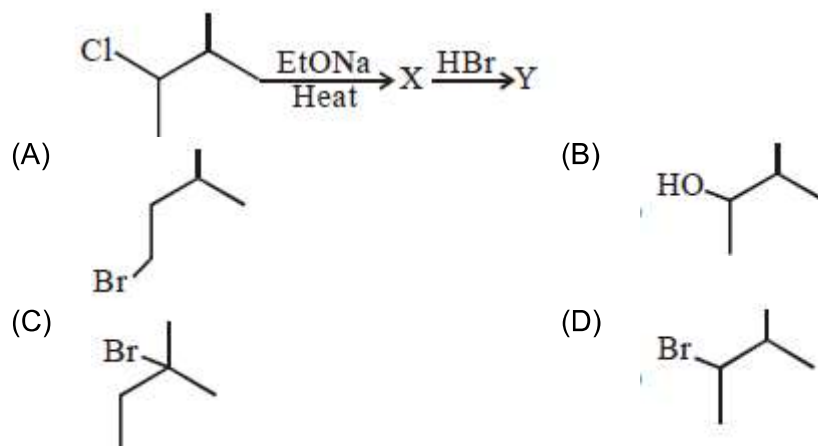
(B) P₄(s) + 5O₂(g) → P₄O₁₀(s)

(C) 4Fe(s) + 3O₂(g) → 2 Fe₂O₃(s)

(D) 2 Mg(s) + O₂(g) → 2 MgO(s)

59. Number of stereo centers present in linear and cyclic structures of glucose are respectively
 (A) 4 & 5 (B) 5 & 5
 (C) 4 & 4 (D) 5 & 4

60. The major product 'Y' in the following reaction is:



PART-C (MATHEMATICS)

61. If $\lim_{x \rightarrow 1} \frac{x^2 - ax + b}{x - 1} = 3$, then $a + b$ is equal to
 (A) 5 (B) 1
 (C) -4 (D) -7
62. The sum of the real roots of the equation

$$\begin{vmatrix} x & -6 & -1 \\ 2 & -3x & x-3 \\ -3 & 2x & x=2 \end{vmatrix} = 0$$
 is equal to
 (A) -4 (B) 0
 (C) 6 (D) 1
63. Lines are drawn parallel to the line $4x - 3y + 2 = 0$ at a distance $\frac{3}{5}$ from the origin. Then which one of the following points lies on any of these lines?
 (A) $\left(-\frac{1}{4}, \frac{2}{3}\right)$ (B) $\left(\frac{1}{4}, \frac{1}{3}\right)$
 (C) $\left(\frac{1}{4}, -\frac{1}{3}\right)$ (D) $\left(-\frac{1}{4}, -\frac{2}{3}\right)$
64. If the tangent to the curve $y = \frac{x}{x^2 - 3}$, $x \in \mathbb{R}$, ($x \neq \pm\sqrt{3}$) at a point $(\alpha, \beta) \neq (0, 0)$ on it is parallel to the line $2x + 6y - 11 = 0$ then
 (A) $|2\alpha + 6\beta| = 11$ (B) $|2\alpha + 6\beta| = 19$
 (C) $|6\alpha + 2\beta| = 19$ (D) $|6\alpha + 2\beta| = 9$
65. The distance of the point having position vector $-\hat{i} + 2\hat{j} + 6\hat{k}$ from the straight line passing through the point $(2, 3, -4)$ and parallel to the vector $6\hat{i} + 3\hat{j} - 4\hat{k}$ is
 (A) 7 (B) $4\sqrt{3}$
 (C) $2\sqrt{13}$ (D) 6
66. If the line $ax + y = c$, touches both the curves $x^2 + y^2 = 1$ and $y^2 - 4\sqrt{2}x$, then $|c|$ is equal to
 (A) $\frac{1}{\sqrt{2}}$ (B) $\sqrt{2}$
 (C) $\frac{1}{2}$ (D) 2
67. Let $f(x) = \log_e(\sin x)$, ($0 < x < \pi$) and $g(x) = \sin^{-1}(e^{-x})$, ($x \geq 0$). If α is a positive real number such that $a = (f \circ g)'(\alpha)$ and $b = (f \circ g)(\alpha)$, then
 (A) $a\alpha^2 + b\alpha - a = 2\alpha^2$ (B) $a\alpha^2 - b\alpha - a = 0$
 (C) $a\alpha^2 - b\alpha - a = 1$ (D) $a\alpha^2 + b\alpha + a = 0$

68. If $5x + 9 = 0$ is the directrix of the hyperbola $16x^2 - 9y^2 = 144$, then its corresponding focus is
- (A) $(5, 0)$ (B) $\left(\frac{5}{3}, 0\right)$
 (C) $(-5, 0)$ (D) $\left(-\frac{5}{3}, 0\right)$
69. If $\cos^{-1}x - \cos^{-1}\frac{y}{2} = \alpha$, where $-1 \leq x \leq 1$, $-2 \leq y \leq 2$, $x \leq \frac{y}{2}$, then for all x, y , $4x^2 - 4xy + \cos \alpha + y^2$ is equal to
- (A) $4 \sin^2\alpha - 2x^2y^2$ (B) $4 \cos^2\alpha + 2x^2y^2$
 (C) $2 \sin^2\alpha$ (D) $4 \sin^2\alpha$
70. The locus of the centres of the circles, which touch the circle, $x^2 + y^2 = 1$ externally, also touch the y -axis and lie in the first quadrant is
- (A) $x = \sqrt{1+2y}, y \geq 0$ (B) $y = \sqrt{1+4x}, x \geq 0$
 (C) $x = \sqrt{1+4y}, y \geq 0$ (D) $y = \sqrt{1+2x}, x \geq 0$
71. Let a_1, a_2, a_3, \dots be an A.P. with $a_6 = 2$. Then the common difference of this A.P., which maximizes the product $a_1 a_4 a_5$ is
- (A) $\frac{3}{2}$ (B) $\frac{8}{5}$
 (C) $\frac{2}{3}$ (D) $\frac{6}{5}$
72. The smallest natural number n , such that the coefficient of x in the expansion of $\left(x^2 + \frac{1}{x^3}\right)^n$ is ${}^n C_{23}$ is
- (A) 38 (B) 58
 (C) 23 (D) 35
73. Suppose that 20 pillars of the same height have been erected along the boundary of a circular stadium. If the top of each pillar has been connected by beams with the top of all its non-adjacent pillars, then the total number of beams is
- (A) 210 (B) 180
 (C) 170 (D) 190
74. A spherical iron ball of radius 10 cm is coated with a layer of ice of uniform thickness that melts at a rate of $50 \text{ cm}^3/\text{min}$. When the thickness of the ice is 5 cm, then the rate at which the thickness (in cm/min) of ice decreases is
- (A) $\frac{1}{36\pi}$ (B) $\frac{5}{6\pi}$
 (C) $\frac{1}{9\pi}$ (D) $\frac{1}{18\pi}$

75. If both the means and the standard deviation of 50 observations x_1, x_2, \dots, x_{50} are equal to 16, then the mean of $(x_1 - 4)^2, (x_2 - 4)^2, \dots, (x_{50} - 4)^2$ is
 (A) 400 (B) 380
 (C) 525 (D) 480
76. The number of real roots of the equation $5 + |2^x - 1| = 2^x(2^x - 2)$ is
 (A) 4 (B) 3
 (C) 2 (D) 1
77. The tangent and normal to the ellipse $3x^2 + 5y^2 = 32$ at the point $P(2, 2)$ meet the x-axis at Q and R, respectively. Then the area(in sq. units) of the triangle PQR is
 (A) $\frac{34}{15}$ (B) $\frac{68}{15}$
 (C) $\frac{14}{3}$ (D) $\frac{16}{3}$
78. A perpendicular is drawn from a point on the line $\frac{x-1}{2} = \frac{y+1}{-1} = \frac{z}{1}$ to the plane $x + y + z = 3$ such that the foot of the perpendicular Q also lies on the plane $x - y + z = 3$. Then the co-ordinates of Q are
 (A) (2, 0, 1) (B) (-1, 0, 4)
 (C) (1, 0, 2) (D) (4, 0, -1)
79. The integral $\int_{\pi/6}^{\pi/3} \sec^{2/3} x \operatorname{cosec}^{4/3} x \, dx$ is equal to
 (A) $3^{5/6} - 3^{2/3}$ (B) $3^{5/3} - 3^{1/3}$
 (C) $3^{7/6} - 3^{5/6}$ (D) $3^{4/3} - 3^{1/3}$
80. The angles A, B and C of a triangle ABC are in A.P and $a : b = 1 : \sqrt{3}$. If $c = 4$ cm, then the area (in sq. cm) of this triangle is
 (A) $2\sqrt{3}$ (B) $\frac{4}{\sqrt{3}}$
 (C) $4\sqrt{3}$ (D) $\frac{2}{\sqrt{3}}$
81. Let a, b and c be in G.P with common ratio r, where $a \neq 0$ and $0 < r \leq \frac{1}{2}$. If $3a, 7b$ and $15c$ are the first three terms of an A.P., then the 4th term of this A.P is
 (A) $\frac{2}{3}a$ (B) $\frac{7}{3}a$
 (C) $5a$ (D) a
82. Let $y = y(x)$ be the solution of the differential equation $\frac{dy}{dx} + y \tan x = 2x + x^2 \tan x, x \in \left(-\frac{\pi}{2}, \frac{\pi}{2}\right)$, such that $y(0) = 1$. Then
 (A) $y'\left(\frac{\pi}{4}\right) + y'\left(\frac{-\pi}{4}\right) = -\sqrt{2}$ (B) $y'\left(\frac{\pi}{4}\right) - y'\left(\frac{-\pi}{4}\right) = \pi - 2$
 (C) $y\left(\frac{\pi}{4}\right) - y\left(\frac{-\pi}{4}\right) = \sqrt{2}$ (D) $y\left(\frac{\pi}{4}\right) + y\left(\frac{-\pi}{4}\right) = \frac{\pi^2}{2} + 2$

83. If the plane $2x - y + 2z + 3 = 0$ has the distances $\frac{1}{3}$ and $\frac{2}{3}$ units from the planes $4x - 2y + 4z + \lambda = 0$ and $2x - y + 2z + \mu = 0$, respectively, then the maximum value of $\lambda + \mu$ is equal to
 (A) 15 (B) 13
 (C) 5 (D) 9
84. The area (in sq. units) of the region bounded by the curves $y = 2^x$ and $y = |x + 1|$ in the first quadrant is
 (A) $\frac{3}{2}$ (B) $\log_e 2 + \frac{3}{2}$
 (C) $\frac{3}{2} - \frac{1}{\log_e 2}$ (D) $\frac{1}{2}$
85. Let λ be a real number for which the system of linear equations
 $x + y + z = 6$
 $4x + \lambda y - \lambda z = \lambda - 2$
 $3x + 2y - 4z = -5$
 Has indefinitely many solutions. Then λ is a root of the quadratic equation
 (A) $\lambda^2 - \lambda - 6 = 0$ (B) $\lambda^2 - 3\lambda - 4 = 0$
 (C) $\lambda^2 + 3\lambda - 4 = 0$ (D) $\lambda^2 + \lambda - 6 = 0$
86. The sum
 $1 + \frac{1^3 + 2^3}{1+2} + \frac{1^3 + 2^3 + 3^3}{1+2+3} + \dots + \frac{1^3 + 2^3 + 3^3 + \dots + 15^3}{1+2+3+\dots+15} - \frac{1}{2}(1+2+3+\dots+15)$ is equal to
 (A) 620 (B) 1860
 (C) 1240 (D) 660
87. Minimum number of times a fair coin must be tossed so that the probability of getting at least one head is more than 99% is
 (A) 8 (B) 6
 (C) 7 (D) 5
88. The negation of the Boolean expression $\sim s \vee (\sim r \wedge s)$ is equivalent to
 (A) $s \vee r$ (B) $\sim s \wedge \sim r$
 (C) r (D) $s \wedge r$
89. If $\int x^5 e^{-x^2} dx = g(x) e^{-x^2} + c$, where c is a constant of integration, then $g(-1)$ is equal to
 (A) -1 (B) 1
 (C) $-\frac{5}{2}$ (D) $-\frac{1}{2}$
90. If z and w are two complex numbers such that $|zw| = 1$ and $\arg(z) - \arg(w) = \frac{\pi}{2}$, then
 (A) $\bar{z}w = i$ (B) $z\bar{w} = \frac{-1+i}{\sqrt{2}}$
 (C) $z\bar{w} = \frac{1-i}{\sqrt{2}}$ (D) $\bar{z}w = -i$

JEE (Mains) – 2019

ANSWERS

PART A – PHYSICS

1.	D	2.	D	3.	A	4.	None
5.	C	6.	A	7.	B	8.	D
9.	C	10.	D	11.	B	12.	B
13.	A	14.	D	15.	B	16.	C
17.	A	18.	B	19.	D	20.	A
21.	D	22.	D	23.	None	24.	D
25.	A	26.	D	27.	D	28.	C
29.	C	30.	C				

PART B – CHEMISTRY

31.	A	32.	C	33.	A	34.	D
35.	C	36.	A	37.	B	38.	C
39.	A	40.	C	41.	B	42.	B
43.	A	44.	A	45.	D	46.	A
47.	D	48.	D	49.	A	50.	C
51.	B	52.	A	53.	A	54.	B
55.	C	56.	A	57.	C	58.	C
59.	A	60.	C				

PART C – MATHEMATICS

61.	D	62.	B	63.	A	64.	C
65.	A	66.	B	67.	C	68.	C
69.	D	70.	D	71.	B	72.	A
73.	C	74.	D	75.	A	76.	D
77.	B	78.	A	79.	C	80.	A
81.	D	82.	B	83.	B	84.	C
85.	A	86.	A	87.	C	88.	D
89.	C	90.	D				